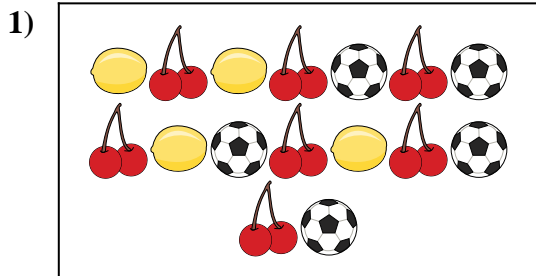






Compare the number of shapes.



Are there more  or more  ?

A. 

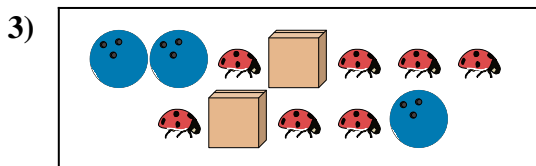
B. 



Are there more  or more  ?

A. 


B. 



Are there less  or less  ?

A. 


B. 



Are there more  or more  ?

A. 

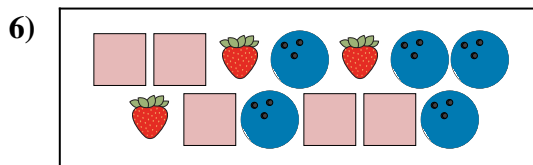
B. 



Are there less  or less  ?

A. 

B. 



Are there more  or more  ?

A. 

B. 

**Answers**

1. \_\_\_\_\_

2. \_\_\_\_\_

3. \_\_\_\_\_


4. \_\_\_\_\_

5. \_\_\_\_\_



6. \_\_\_\_\_




Compare the number of shapes.






Are there more  or more  ?

- A. 
- B. 






Are there more  or more  ?

- A. 
- B. 






Are there less  or less  ?

- A. 
- B. 





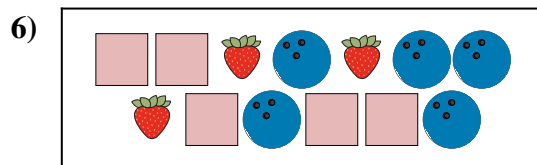
Are there more  or more  ?

- A. 
- B. 





Are there less  or less  ?

- A. 
- B. 



Are there more  or more  ?

- A. 
- B. 

**Answers**

- 1.   **A**
- 2.   **B**
- 3.   **B**
- 4.   **B**
- 5.   **A**
- 6.   **B**